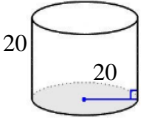
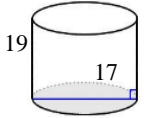


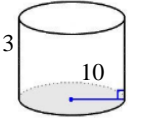


1)  Find Volume of Cylinder

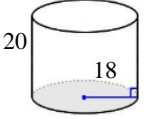
Answer: _____

2)  Find Volume of Cylinder

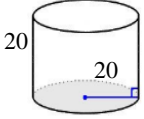
Answer: _____

3)  Find Volume of Cylinder

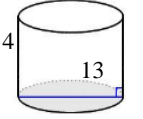
Answer: _____

4)  Find Volume of Cylinder

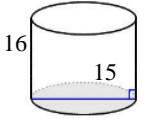
Answer: _____

5)  Find Volume of Cylinder

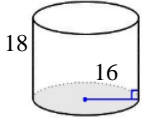
Answer: _____

6)  Find Volume of Cylinder

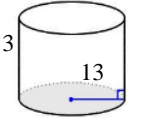
Answer: _____

7)  Find Volume of Cylinder

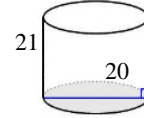
Answer: _____

8)  Find Volume of Cylinder

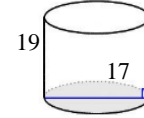
Answer: _____

9)  Find Volume of Cylinder

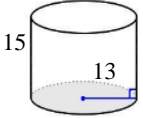
Answer: _____

10)  Find Volume of Cylinder

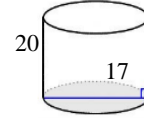
Answer: _____

11)  Find Volume of Cylinder

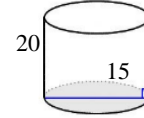
Answer: _____

12)  Find Volume of Cylinder

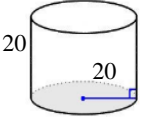
Answer: _____

13)  Find Volume of Cylinder

Answer: _____

14)  Find Volume of Cylinder

Answer: _____

15)  Find Volume of Cylinder

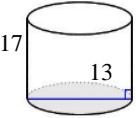
Answer: _____

Name: _____

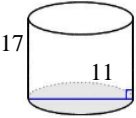
Sr: 06042024-3577

April 06, 2024

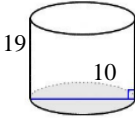


16)  Find Volume of Cylinder

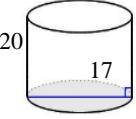
Answer: _____

17)  Find Volume of Cylinder

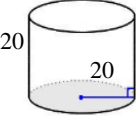
Answer: _____

18)  Find Volume of Cylinder

Answer: _____

19)  Find Volume of Cylinder

Answer: _____

20)  Find Volume of Cylinder

Answer: _____

Total: ___ / 20

Name: _____

Sr: 06042024-3577

April 06, 2024

MATHS WORKSHEET
GENERATOR



11-PLUS
SATS
GCSES



Answers:

- 1) 25132.741228718 2) 4312.6213152154 3) 4084.0704496667 4) 20357.520395262 5) 25132.741228718 6) 1858.2520545984 7) 2827.4333882308
8) 14476.458947742 9) 6902.0790599368 10) 6597.3445725386 11) 4312.6213152154 12) 7963.9373768501 13) 4539.6013844373 14) 3534.2917352885
15) 25132.741228718 16) 2256.4489234409 17) 1615.5640221086 18) 1492.2565104552 19) 4539.6013844373 20) 25132.741228718